











Write the numbers you have coloured. DO in book


2	4	6	8	10	12	14	16	18	20
---	---	---	---	----	----	----	----	----	----

You see that the coloured boxes have numbers that end with 0, 2, 4, 6 and 8.

Count the beads and build the 2 times table. Say the table aloud.

	$1 \times 2 = 2$
	$2 \times 2 = 4$
	$3 \times 2 = 6$
	$4 \times 2 = 8$
	$5 \times 2 = 10$
	$6 \times 2 = 12$
	$7 \times 2 = 14$
	$8 \times 2 = 16$
	$9 \times 2 = 18$
	$10 \times 2 = 20$

Skippy wants to reach Flippy. He jumps 2 steps each time.



7 jumps of 2 steps each, $7 \times 2 = 14$

How many times does Skippy jump? 7

Write the multiplication fact. $7 \times 2 = 14$



EXERCISE 4.2

Do in book

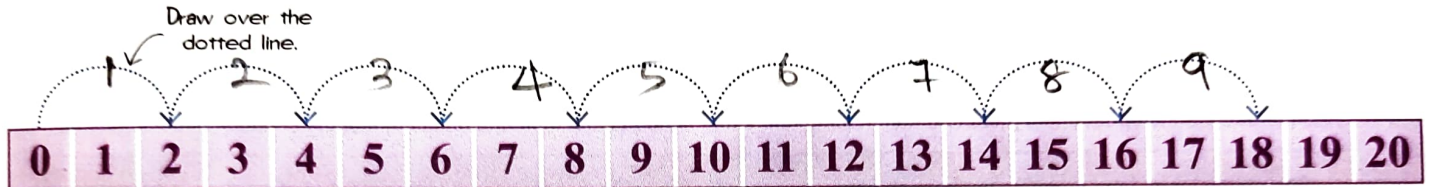


Colour it if you get all your sums right.


A. Fill in the blanks.



6 jumps of 2 steps each, $6 \times 2 = 12$



9 jumps of 2 steps each, $9 \times 2 = 18$



5 jumps of 2 steps each, $5 \times 2 = 10$

B. Write the multiplication fact for each picture.

MULTIPLICATION FACT



$2 \times 2 = 4$



$7 \times 2 = 14$



$5 \times 2 = 10$



$4 \times 2 = 8$



$3 \times 2 = 6$



NOT FOR SALE
COMPLIMENTARY COPY