

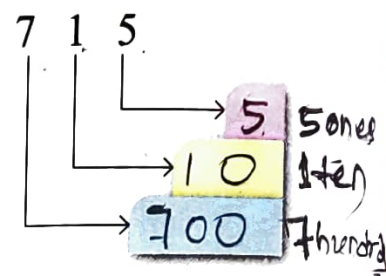
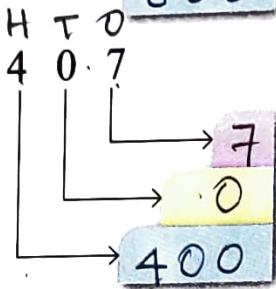
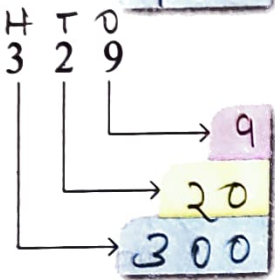
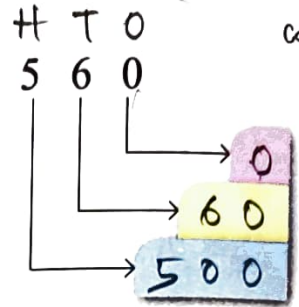
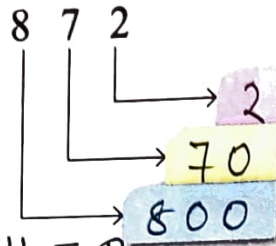
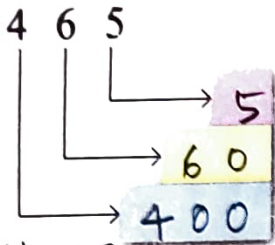
# EXERCISE 5.2



Do in book.

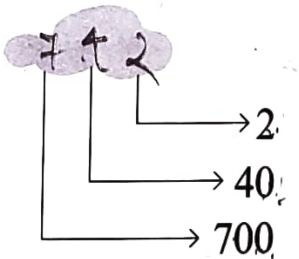
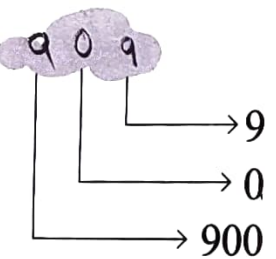
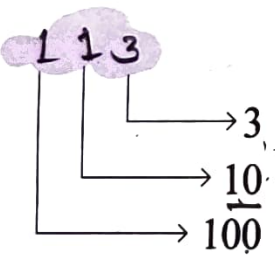
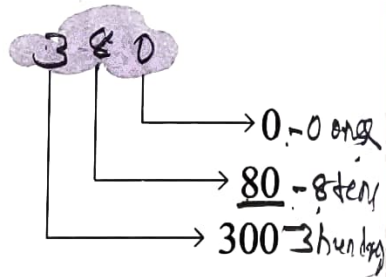
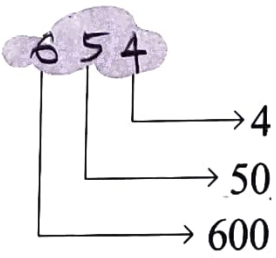
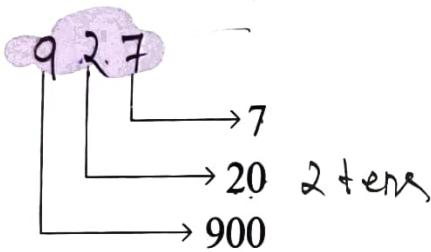
Colour it if you get all your sums right.

## A. Write the place value of each digit.



## B. Write the number.

Do in book.



## C. Write the expanded form.

Do in copy.

268 =	200	+	60	+	8		213 =	200	+	10	+	3
157 =	100	+	50	+	7		720 =	700	+	20	+	0
496 =	400	+	90	+	6		805 =	800	+	0	+	5
999 =	900	+	90	+	9		654 =	600	+	50	+	4

**D. Write the number**

Do in copy.

before	in between	after
259 260	475 476 477	413 414
379 380	610 611 612	368 369
900 901	729 730 731	519 520
332 333	853 854 855	254 255
399 400	599 600 601	897 898

**E. Write the number that is**

Do in copy.

10 less than (-10)

10 more than (+10)

751 741

Number - 10  
= a number that is  
10 less than

347 357

890 880

Number + 10  
= a number that is  
10 more than

209 219

312 302



910 920

573 563



821 831

181 171

786 796

**F. Write the number that is**

Do in copy.

100 less than (-100)

100 more than (+100)

325 225

Number - 100  
= a number that is  
100 less than

418 518

908 808

Number + 100  
= a number that is  
100 more than

705 805

690 590



899 999

157 57



560 660

213 113

273 373



Colour the numbers in which the place value of Do in book.

CHECKPOINT!

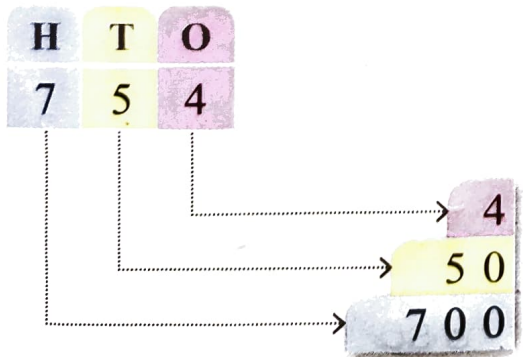
3 is 300.	430	372	503	306
8 is 80.	784	805	608	85
9 is 900.	790	901	109	970
3 is 3.	413	532	346	23
1 is 100.	713	841	178	112
5 is 50.	125	509	352	50
7 is 7.	567	570	705	507
6 is 600.	634	561	556	600
3 is 30.	300	344	239	434
6 is 6.	326	516	961	607

How many numbers did you find in each row?




### EXPANDED FORM OF A NUMBER

Write the expanded form of 754.

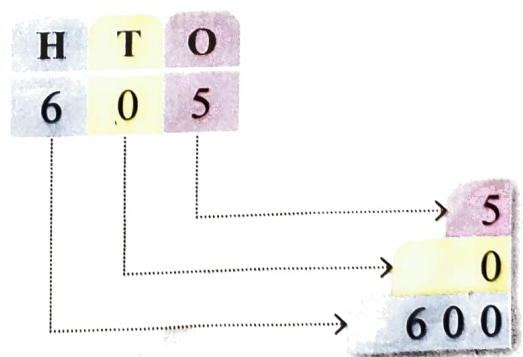


SHORT FORM = 754  
 EXPANDED FORM = 700 + 50 + 4

= 7 hundreds + 5 tens + 4 ones.



Write the expanded form of 605.



SHORT FORM = 605  
 EXPANDED FORM = 600 + 0 + 5

= 6 hundreds + 0 tens + 5 ones