

In hours

When the minute hand is on 12, the time is in full hours.



The hour hand is at 3 in this clock. The minute hand is at 12. So the time is 3.00 or 3 o'clock

In half hours

When the minute hand is on 6, the time is in half hours.



The hour hand is between 3 and 4 in this clock. The minute hand is at 6. So the time is 3.30 or half past 3

ENRICHMENT ACTIVITY

Do in book & copy

Tortu, the tortoise, has forgotten some facts about time. Help him fill in the blanks.



two hour 1 minute 60 small 12

CHECKPOINT!

1. A clock has 2 hands. The small hand is the hour hand.
2. The hour hand takes 1 hour to move from one number to the next on the clock.
3. In one hour the big hand goes round the clock once.
4. The big hand is the minute-hand.
5. The 12 numbers stand for hours.
6. The 60 small lines stand for minutes.



EXERCISE 8.1

Do in book & copy

Colour it if you get all your sums right.



A. Draw hands on the clocks to show the time written below.



1 o'clock



12 o'clock



7 o'clock





9.30





12.30

B. Read the time. Draw the hands to show the time 1 hour later.

1.  $\xrightarrow{\text{1 hour later}}$ 

5:30
half past 5

6:30
half past 6

2.  $\xrightarrow{\text{1 hour later}}$ 

9:30
half past 9

10:30
half past 10