













Let us see how the minute hand moves in an hour, and write the time.

 6.00 6 o'clock	 6.05 5 minutes past 6	 6.10 10 minutes past 6	 6.15 15 minutes past 6 Quarter past 6	 6.20 20 minutes past 6	 6.25 25 minutes past 6
 6.30 30 minutes past 6 Half past 6	 6.35 25 minutes to 7	 6.40 20 minutes to 7	 6.45 15 minutes to 7 Quarter to 7	 6.50 10 minutes to 7	 6.55 5 minutes to 7


EXERCISE 8.2

Colour it if you get all your sums right.



A. Write the time in two ways.


Do in book and copy.




5.15
quarter past 5




6.45
Quarter to 7
15 mins to 7



11.30
Half past 11
30 mins past 11



12.45
Quarter to 1
15 mins past 12




6.15
15 mins past 6
quarter past 6




2.35
25 mins to 3




8.55
5 mins to 9



4.10
10 mins past 4



7.40
20 mins to 8



6.50
10 mins to 7

B. Match the columns.

- 10.45
- 10.15
- 7.20
- 7.40
- 9.30

- 20 minutes to 8 (4)
- 20 minutes past 7 (3)
- quarter to 11 (1)
- half past 9 (5)
- quarter past 10 (2)

This activity will not take more than 5 minutes.



ESTIMATING TIME

It takes a **second** to blink your eyes.

It takes about a **minute** to fill a glass with water.

It takes a little more than an **hour** to play a hockey match.

Try this!
Throw a ball into the air.
How many times can you clap before you catch the ball?



Do in book and copy.

ENRICHMENT ACTIVITY



MENTAL MATHS

Fill in the blanks. Choose from the box. You will have to use some of the words more than once.

How long will it take for

1. rice to grow from seed? months
2. you to reach Class 7? years
3. a tailor to stitch a dress? days
4. you to reach Chennai from Delhi by train? hours
5. you to reach Chennai from Delhi by plane? minutes
6. you to brush your teeth? minutes
7. you to sing a song? minutes
8. your nails to grow? days



minutes hours days months years

HOTS question



Vincent reached home from work at 5 in the evening. He had fever. He had a sandwich and a cup of tea and went to sleep at 6 o'clock. He woke up fresh the next morning at 5 o'clock. How many hours did Vincent sleep? 11 hours

