



TIME

WARM UP

Do in book



A. Maithli is making her timetable for the holidays. Match the activity with the time.


MORNING and AFTERNOON

- Get up — 8.00
- Have my bath — 1.00
- Have my breakfast — 7.30
- Have lunch — 8.30

EVENING

- Go out to play — 8.00
- Watch television — 9.30
- Have dinner — 5.00
- Go to bed — 7.00

B. Write the missing numbers on the clock face.



minute hand

hour hand

The long hand is the minute hand.
The short hand is the hour hand.



C. Write the time.

Two ways



9:00

9 o'clock



4:00

4 o'clock



7:00

7 o'clock







6:00

6 o'clock

READING TIME




This is Maithli's timetable.

Morning		Clock against each
Get up	<u>7.30</u>	The hour hand is between 7 and 8. The minute hand is at 6. Say, seven thirty or half past seven . 
Have my bath	8.00	The hour hand is at 8. The minute hand is at 12. Say, eight o'clock . 8.00 
Have my breakfast	<u>8.30</u>	The hour hand is between <u>8</u> and <u>9</u> . The minute hand is at <u>6</u> . Say, eight thirty or half past eight . 
Have lunch	1.00	The hour hand is at <u>1</u> . The minute hand is at <u>12</u> . Say, one o'clock . 1.00 

When I sat down to have lunch, the hour hand was at 1. Now it is at 2.



The hour hand takes one hour to move from one number to the next.

Evening		Clock against each
Go out to play	<u>5.00</u>	The hour hand is at <u>5</u> . The minute hand is at <u>12</u> . Say, five o'clock . 5.00 
Watch television	7.00	The hour hand is at <u>7</u> . The minute hand is at <u>12</u> . Say, seven o'clock . 7.00 
Have dinner	<u>8.00</u>	The hour hand is at <u>8</u> . The minute hand is at <u>12</u> . Say, eight o'clock . 8.00 

I went to wash my face and hands when the minute hand was at 12. Now it has moved to 1.

