

## EXERCISE 14.1

---



Colour it if you get all your sums right.

A. Make a list of the things you have to do during the weekend.


This is your list.

Saturday; Sunday

### TO DO LIST

- 1.
- 2.
- 3.
- 4.
- 5.

I have to go and collect my babies from school.



This is Mugdha's list.

### TO DO LIST

- ◆ Change cover of Maths notebook
- ◆ Clean my bicycle
- ◆ Polish school shoes
- ◆ Complete homework



B. Birthday time for Mona's class! The table shows the number of boys and girls in Mona's class who have their birthdays in each month of the year. Write the missing numbers.

Do in book and copy.

Months	Girls	Boys	In all
January	1	2	3
February	3	4	7
March	1	1	2
April	4	2	6
May	0	4	4
June	2	5	7
July	0	2	2
August	1	4	5
September	2	3	5
October	2	0	2
November	5	2	7
December	3	6	9

12 months = 1 year





6-2

Look at the birthday chart and answer the questions.

- How many boys celebrate their birthdays in December? 6
- How many girls celebrate their birthdays in April? 4
- Which month has the most number of birthdays? December
- Which month has the least number of birthdays? March, July and October



C. How do the children in Mona's class come to school? *Do in book and copy.*

Means of transport				
Number of children	12	<u>14</u>	<u>7</u>	<u>5</u>

How many children come by bicycle? *12*

How many more children come by bus than by car? *7*  $14 - 7 = 7$






Least number of children come by walking. (*5*)

Most number of children come by bus. (*14*)

D. Look at these fresh fruits. Count and fill in the information in the following table.



*Do in book*

Fruits					
Numbers	<i>2</i>	<i>1</i>	<i>2</i>	<i>4</i>	<i>2</i>

What is the total number of fruits in the basket? *11*

$$2 + 1 + 2 + 4 + 2 = 11$$

