

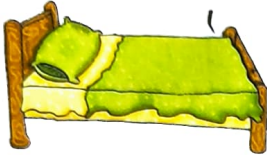
ENRICHMENT ACTIVITIES

MEASUREMENT

Do in book.

A. Circle the correct option.

CORRECT LENGTH



3 cm

3 m



15 cm

15 m

150 cm

CORRECT WEIGHT



5 g

5 kg



50 g

50 kg

CORRECT CAPACITY



20 mL

20 L



200 mL

200 L

B. Circle the unit you will use to measure

weight of newspaper.

cm

g

L

water in bottle.

m

kg

L

length of ribbon.

cm

g

mL

height of tree.

m

kg

L

Do in book and copy amount of milk in glass.

cm

g

mL

weight of school bag.

cm

kg

L

SHAPES AND PATTERNS

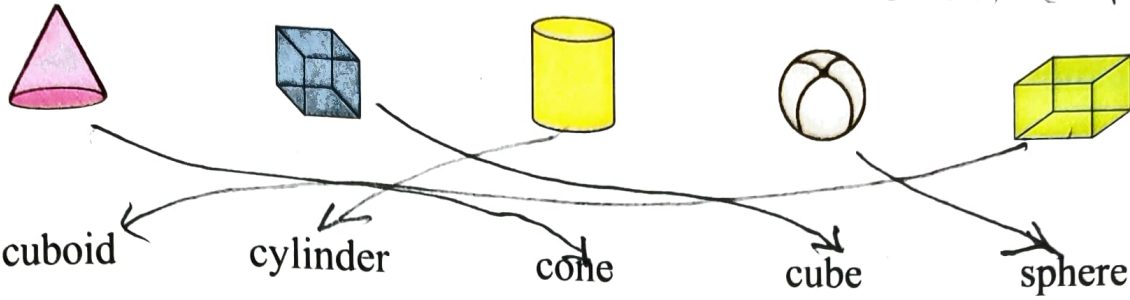
Do in book.

A. Complete the pattern.



B. Match the shape to its name.

Do in copy.



TIME

A. Tick (✓) the correct option.

Do in copy.

If today is Monday, yesterday was

Tuesday. Sunday. Friday.

_____ comes after Friday.

Thursday Saturday Sunday

There are _____ days in a week.

7 12 3

Independence day is in the month of

January. August. September.

The last month of the year is

December. November. January.

B. Draw the hands to show the time.

Do in book.



3.30

half past 12

9 o'clock

11.30





Half past 3

12.30

Half past 11

MONEY

A. Colour the notes and coins needed to buy Do in book.

	₹ 15	₹ 10	₹ 10	₹ 10	₹ 5	₹ 1		
	₹ 20	₹ 10	₹ 5	₹ 5	₹ 5	₹ 2	₹ 1	₹ 1
	₹ 8	₹ 10	₹ 5	₹ 5	₹ 2	₹ 2	₹ 1	
	₹ 25	₹ 20	₹ 5	₹ 5	₹ 2	₹ 1	₹ 1	






Handwritten calculations below the table:
 For the bear: $10 + 5 + 2 + 2 + 1$
 For the ball: $20 + 5$

DATA HANDLING

Do in book.

A. Given below are the pictures of some animals. How many of each kind of animals do you see? Fill in the table.



Animal					
Number	3	3	1	2	4